

展翅高飛 - 正角錐的展開圖








問題一. 請畫出四角錐的所有開圖並算出共有多少種? (8)種



















| | | | |
|-----------|-----------|-----------|-----------|
| <p>1.</p> | <p>2.</p> | <p>3.</p> | <p>4.</p> |
| <p>5.</p> | <p>6.</p> | <p>7.</p> | <p>8.</p> |


















問題二. 請畫出五角錐的所有展開圖並算出共有多少種? (15)種

| | | | |
|-----------|-----------|-----------|-----------|
| <p>1.</p> | <p>2.</p> | <p>3.</p> | <p>4.</p> |
| <p>5.</p> | <p>6.</p> | <p>7.</p> | <p>8.</p> |

| | | | |
|--|--|---|--|
| <p>9.</p>  | <p>10.</p>  | <p>11.</p>  | <p>12.</p>  |
| <p>13.</p>  | <p>14.</p>  | <p>15.</p>  | |

問題三. 請畫出六角錐的所有展開圖並算出共有多少種? (33)種

| | | | |
|--|--|---|--|
| <p>1.</p>  | <p>2.</p>  | <p>3.</p>  | <p>4.</p>  |
| <p>5.</p>  | <p>6.</p>  | <p>7.</p>  | <p>8.</p>  |
| <p>9.</p>  | <p>10.</p>  | <p>11.</p>  | <p>12.</p>  |
| <p>13.</p>  | <p>14.</p>  | <p>15.</p>  | <p>16.</p>  |

| | | | |
|--|--|---|--|
| <p>17.</p>  | <p>18.</p>  | <p>19.</p>  | <p>20.</p>  |
| <p>21.</p>  | <p>22.</p>  | <p>23.</p>  | <p>24.</p>  |
| <p>25.</p>  | <p>26.</p>  | <p>27.</p>  | <p>28.</p>  |
| <p>29.</p>  | <p>30.</p>  | <p>31.</p>  | <p>32.</p>  |
| <p>33.</p>  | | | |